

Se hvad klokken er under urene - tegn derefter de rigtige visere.



**05:45**



**03:45**



**08:15**



**09:15**



**11:15**



**08:45**



**12:15**



**02:15**



**10:15**



**04:15**




**10:45**




**03:15**


Se hvad klokken er under urene - tegn derefter de rigtige visere.




05:45




03:45




08:15




09:15




11:15




08:45




12:15




02:15




10:15



04:15



10:45



03:15