

Se hvad klokken er under urene - tegn derefter de rigtige visere.



07:30



12:30



11:30



05:30



07:30



10:30



03:30



04:30



08:30



02:30




09:30




01:30


Se hvad klokken er under urene - tegn derefter de rigtige visere.




07:30




12:30




11:30




05:30




07:30




10:30




03:30




04:30




08:30



02:30



09:30



01:30