

Se hvad klokken er under urene - tegn derefter de rigtige visere.



06:45



03:30



08:15



03:15



06:15



11:30



11:45



09:30



10:45



05:30




07:30




01:15


Se hvad klokken er under urene - tegn derefter de rigtige visere.




06:45




03:30




08:15




03:15




06:15




11:30




11:45




09:30




10:45



05:30



07:30



01:15