

Se hvad klokken er under urene - tegn derefter de rigtige visere.



06:15



04:45



01:15



07:45



08:15



12:15



10:45



05:45



06:45



10:15




01:45




12:45


Se hvad klokken er under urene - tegn derefter de rigtige visere.




06:15




04:45




01:15




07:45




08:15




12:15




10:45




05:45




06:45



10:15



01:45



12:45