

Se hvad klokken er under urene - tegn derefter de rigtige visere.



11:45



04:30



12:00



07:30



08:45



02:15



04:00



02:45



05:45



04:15




05:00




02:00


Se hvad klokken er under urene - tegn derefter de rigtige visere.




11:45




04:30




12:00




07:30




08:45




02:15




04:00




02:45




05:45



04:15



05:00



02:00