

Se hvad klokken er under urene - tegn derefter de rigtige visere.



04:45



03:45



11:15



05:15



11:45



08:15



02:45



03:15



09:45



01:45




09:15




10:15


Se hvad klokken er under urene - tegn derefter de rigtige visere.




04:45




03:45




11:15




05:15




11:45




08:15




02:45




03:15




09:45



01:45



09:15



10:15