

Se hvad klokken er under urene - tegn derefter de rigtige visere.



10:30



05:30



11:30



01:30



09:30



07:30



04:30



07:30



03:30



12:30




08:30




02:30


Se hvad klokken er under urene - tegn derefter de rigtige visere.




10:30




05:30




11:30




01:30




09:30




07:30




04:30




07:30




03:30



12:30



08:30



02:30