

Se hvad klokken er under urene - tegn derefter de rigtige visere.



09:15



06:15



11:15



04:45



09:45



05:45



01:45



11:45



06:45



07:15




02:15




01:15


Se hvad klokken er under urene - tegn derefter de rigtige visere.




09:15




06:15




11:15




04:45




09:45




05:45




01:45




11:45




06:45



07:15



02:15



01:15