

Se hvad klokken er under urene - tegn derefter de rigtige visere.



01:45



08:45



03:15



05:45



08:15



04:15



07:15



03:45



09:45



11:45




07:45




04:45


Se hvad klokken er under urene - tegn derefter de rigtige visere.




01:45




08:45




03:15




05:45




08:15




04:15




07:15




03:45




09:45



11:45



07:45



04:45