

Se hvad klokken er under urene - tegn derefter de rigtige visere.



09:30



01:30



05:30



08:30



01:00



07:30



07:00



09:00



10:30



11:30




05:00




02:00


Se hvad klokken er under urene - tegn derefter de rigtige visere.




09:30




01:30




05:30




08:30




01:00




07:30




07:00




09:00




10:30



11:30



05:00



02:00