

Se hvad klokken er under urene - tegn derefter de rigtige visere.



07:30



03:30



02:00



01:15



09:30



08:45



04:45



06:45



08:30



04:30




09:45




01:30


Se hvad klokken er under urene - tegn derefter de rigtige visere.




07:30




03:30




02:00




01:15




09:30




08:45




04:45




06:45




08:30



04:30



09:45



01:30