

Se hvad klokken er under urene - tegn derefter de rigtige visere.



12:30



05:45



05:30



06:45



10:00



08:30



03:45



02:45



12:15



10:30




04:30




07:15


Se hvad klokken er under urene - tegn derefter de rigtige visere.




12:30




05:45




05:30




06:45




10:00




08:30




03:45




02:45




12:15



10:30



04:30



07:15