

Se hvad klokken er under urene - tegn derefter de rigtige visere.



10:30



04:30



07:30



08:30



07:30



09:30



02:00



07:00



04:00



01:30




05:30




09:00


Se hvad klokken er under urene - tegn derefter de rigtige visere.




10:30




04:30




07:30




08:30




07:30




09:30




02:00




07:00




04:00



01:30



05:30



09:00