

Se hvad klokken er under urene - tegn derefter de rigtige visere.



02:45



01:45



10:30



06:15



01:00



03:15



10:00



04:30



05:15



01:30




08:45




04:15


Se hvad klokken er under urene - tegn derefter de rigtige visere.




02:45




01:45




10:30




06:15




01:00




03:15




10:00




04:30




05:15



01:30



08:45



04:15