

Se hvad klokken er under urene - tegn derefter de rigtige visere.



01:00



03:00



11:00



10:00



06:00



05:00



04:00



02:00



12:00



07:00




09:00




08:00


Se hvad klokken er under urene - tegn derefter de rigtige visere.




01:00




03:00




11:00




10:00




06:00




05:00




04:00




02:00




12:00



07:00



09:00



08:00