

Se hvad klokken er under urene - tegn derefter de rigtige visere.



11:00



03:00



11:30



05:30



07:30



08:30



03:30



04:30



07:30



12:00




04:00




10:30


Se hvad klokken er under urene - tegn derefter de rigtige visere.




11:00




03:00




11:30




05:30




07:30




08:30




03:30




04:30




07:30



12:00



04:00



10:30