

Se hvad klokken er under urene - tegn derefter de rigtige visere.



01:45



10:45



09:45



05:45



07:45



12:15



03:45



12:45



06:45



02:15




04:15




10:15


Se hvad klokken er under urene - tegn derefter de rigtige visere.




01:45




10:45




09:45




05:45




07:45




12:15




03:45




12:45




06:45



02:15



04:15



10:15