

Se hvad klokken er under urene - tegn derefter de rigtige visere.



04:30



12:00



09:30



12:30



07:00



03:00



01:30



07:30



02:30



05:00




10:30




09:00


Se hvad klokken er under urene - tegn derefter de rigtige visere.




04:30




12:00




09:30




12:30




07:00




03:00




01:30




07:30




02:30



05:00



10:30



09:00