

Se hvad klokken er under urene - tegn derefter de rigtige visere.



08:30



11:30



01:30



07:30



05:30



02:30



10:30



09:30



04:30



03:30




07:30




12:30


Se hvad klokken er under urene - tegn derefter de rigtige visere.




08:30




11:30




01:30




07:30




05:30




02:30




10:30




09:30




04:30



03:30



07:30



12:30