

Se hvad klokken er under urene - tegn derefter de rigtige visere.



03:00



09:00



01:30



03:30



12:00



05:30



04:00



12:30



07:30



02:30




08:30




05:00


Se hvad klokken er under urene - tegn derefter de rigtige visere.




03:00




09:00




01:30




03:30




12:00




05:30




04:00




12:30




07:30



02:30



08:30



05:00