

Se hvad klokken er under urene - tegn derefter de rigtige visere.



**02:15**



**07:15**



**04:45**



**08:15**



**03:15**



**06:15**



**10:45**



**05:15**



**05:45**



**08:45**




**07:45**




**10:15**


Se hvad klokken er under urene - tegn derefter de rigtige visere.




02:15




07:15




04:45




08:15




03:15




06:15




10:45




05:15




05:45



08:45



07:45



10:15