










Bryd billedkoden og indsæt de manglende tal.

								
9	2	1	5	8	7	3	6	4

$$\square + \text{mushroom} = \text{table}$$

$$\text{jester} - \square = \text{mushroom}$$

$$\square + \text{sun} = \text{wheat}$$

$$\text{toothbrush} + \square = \text{fire}$$

$$\text{jester} - \square = \text{table}$$

$$\square - \text{mushroom} = \text{jester}$$

$$\square + \text{table} = \text{wheat}$$

$$\square - \text{fire} = \text{toothbrush}$$










$$\text{table} + \square = \text{snake}$$

$$\square - \text{toothbrush} = \text{mushroom}$$

$$\square - \text{mushroom} = \text{toothbrush}$$

$$\square + \text{toothbrush} = \text{snake}$$

Bryd billedkoden og indsæt de manglende tal.

								
9	2	1	5	8	7	3	6	4

$$\boxed{3} + \text{mushroom} = \text{table}$$

$$\text{jester} - \boxed{5} = \text{mushroom}$$

$$\boxed{3} + \text{sun} = \text{wheat}$$

$$\text{toothbrush} + \boxed{3} = \text{fire}$$

$$\text{jester} - \boxed{2} = \text{table}$$

$$\boxed{9} - \text{mushroom} = \text{jester}$$

$$\boxed{1} + \text{table} = \text{wheat}$$

$$\boxed{5} - \text{fire} = \text{toothbrush}$$

$$\text{table} + \boxed{3} = \text{snake}$$

$$\boxed{3} - \text{toothbrush} = \text{mushroom}$$

$$\boxed{3} - \text{mushroom} = \text{toothbrush}$$

$$\boxed{7} + \text{toothbrush} = \text{snake}$$