










Bryd billedkoden og indsæt de manglende tal.

								
7	8	2	6	9	3	1	5	4

$$\text{Bull head} - \square = \text{Duck}$$

$$\square - \text{Watermelon slice} = \text{Snail}$$

$$\square + \text{Frog} = \text{Castle}$$

$$\square - \text{Cobra} = \text{Frog}$$

$$\square + \text{Frog} = \text{Bull head}$$

$$\square - \text{Cobra} = \text{Duck}$$

$$\square + \text{Duck} = \text{Watermelon slice}$$

$$\text{Snail} + \square = \text{Duck}$$










$$\text{Turtle} - \square = \text{Cobra}$$

$$\text{Snail} + \square = \text{Turtle}$$

$$\square + \text{Snail} = \text{Crescent moon}$$

$$\text{Castle} - \square = \text{Crescent moon}$$

Bryd billedkoden og indsæt de manglende tal.

								
7	8	2	6	9	3	1	5	4

$$\text{Bull head} - \boxed{6} = \text{Duck}$$

$$\boxed{7} - \text{Watermelon slice} = \text{Snail}$$

$$\boxed{5} + \text{Frog} = \text{Castle}$$

$$\boxed{7} - \text{Snake} = \text{Frog}$$

$$\boxed{7} + \text{Frog} = \text{Bull head}$$

$$\boxed{8} - \text{Snake} = \text{Duck}$$

$$\boxed{3} + \text{Duck} = \text{Watermelon slice}$$

$$\text{Snail} + \boxed{2} = \text{Duck}$$

$$\text{Turtle} - \boxed{3} = \text{Snake}$$

$$\text{Snail} + \boxed{7} = \text{Turtle}$$

$$\boxed{3} + \text{Snail} = \text{Crescent moon}$$

$$\text{Castle} - \boxed{3} = \text{Crescent moon}$$