




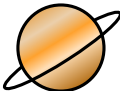





Bryd billedkoden og indsæt de manglende tal.

								
4	5	3	6	7	2	1	8	9

$$- \text{Nose} = \text{Castle}$$

$$\text{Bee} - \text{Box} = \text{Bull's head}$$

$$\text{Bee} - \text{Box} = \text{Billiard table}$$

$$\text{Cat} - \text{Box} = \text{Bee}$$

$$\text{Bull's head} - \text{Box} = \text{Planet}$$

$$\text{Box} - \text{Bull's head} = \text{Castle}$$

$$\text{Box} - \text{Crown} = \text{Planet}$$

$$\text{Chicken} - \text{Box} = \text{Castle}$$






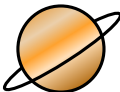



$$\text{Nose} - \text{Box} = \text{Castle}$$

$$\text{Crown} - \text{Box} = \text{Bull's head}$$

$$\text{Cat} - \text{Box} = \text{Billiard table}$$

$$\text{Chicken} - \text{Box} = \text{Bull's head}$$

Bryd billedkoden og indsæt de manglende tal.

								
4	5	3	6	7	2	1	8	9

$$\boxed{9} - \text{nose} = \text{castle}$$



=



-

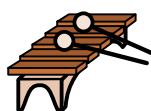
$$\boxed{3} = \text{bull}$$



-

$$\boxed{2} = \text{table}$$

=



-

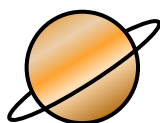
$$\boxed{3} = \text{bee}$$



-

$$\boxed{1} = \text{planet}$$

=



$$\boxed{4} - \text{bull} = \text{castle}$$

=

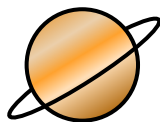


$$\boxed{7} - \text{crown} = \text{planet}$$

-



=



-

$$\boxed{6} = \text{castle}$$



-

$$\boxed{7} = \text{castle}$$

=



-

$$\boxed{2} = \text{bull}$$



-

$$\boxed{5} = \text{table}$$

=



-

$$\boxed{4} = \text{bull}$$

