











































Bryd billedkoden og løs regnestykkerne.

								
7	6	2	5	4	9	1	3	8

 -  = <input type="text"/>	 +  = <input type="text"/>
 +  = <input type="text"/>	 -  = <input type="text"/>
 +  = <input type="text"/>	 +  = <input type="text"/>
 -  = <input type="text"/>	 +  = <input type="text"/>
 +  = <input type="text"/>	 -  = <input type="text"/>
 -  = <input type="text"/>	 -  = <input type="text"/>

Bryd billedkoden og løs regnestykkerne.

								
7	6	2	5	4	9	1	3	8

$$\text{Flashlight} - \text{Cat} = 4$$

$$\text{Cat} + \text{Bee} = 8$$

$$\text{Tree} + \text{Cat} = 4$$

$$\text{Flashlight} - \text{Bee} = 2$$

$$\text{Cat} + \text{Bee} = 8$$

$$\text{Tree} + \text{Tree} = 2$$

$$\text{Cat} - \text{Carrot} = 1$$

$$\text{Bee} + \text{Carrot} = 7$$

$$\text{Flashlight} + \text{Carrot} = 9$$

$$\text{Bee} - \text{Puppy} = 1$$

$$\text{Tractor} - \text{Flashlight} = 2$$

$$\text{Flashlight} - \text{Bee} = 2$$