










Bryd billedkoden og løs regnestykkerne.

								
1	4	3	7	9	5	8	6	2

$$\text{Alarm clock} - \text{mouse} = \square$$

$$\text{lemons} - \text{snake} = \square$$

$$\text{strawberry} - \text{mouse} = \square$$

$$\text{snake} + \text{basketball} = \square$$

$$\text{lemons} - \text{cat} = \square$$

$$\text{lemons} + \text{basketball} = \square$$

$$\text{cat} + \text{lemons} = \square$$

$$\text{mouse} + \text{mouse} = \square$$










$$\text{cat} + \text{lemons} = \square$$

$$\text{alarm clock} - \text{strawberry} = \square$$

$$\text{snake} - \text{mouse} = \square$$

$$\text{mouse} + \text{snake} = \square$$

Bryd billedkoden og løs regnestykkerne.

								
1	4	3	7	9	5	8	6	2

$$\text{alarm clock} - \text{mouse} = 6$$

$$\text{lemons} - \text{snake} = 2$$

$$\text{strawberry} - \text{mouse} = 3$$

$$\text{snake} + \text{basketball} = 7$$

$$\text{lemons} - \text{cat} = 6$$

$$\text{lemons} + \text{basketball} = 9$$

$$\text{cat} + \text{lemons} = 8$$

$$\text{mouse} + \text{mouse} = 6$$

$$\text{cat} + \text{lemons} = 8$$

$$\text{alarm clock} - \text{strawberry} = 3$$

$$\text{snake} - \text{mouse} = 2$$

$$\text{mouse} + \text{snake} = 8$$