






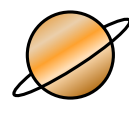



Bryd billedkoden og løs regnestykkerne.

								
9	4	1	8	3	5	6	2	7

$$\text{crown} + \text{planet} = \square$$

$$\text{cat} - \text{crown} = \square$$

$$\text{cat} - \text{chicken} = \square$$

$$\text{bee} - \text{bull} = \square$$

$$\text{bull} + \text{bee} = \square$$

$$\text{castle} + \text{bee} = \square$$

$$\text{chicken} + \text{planet} = \square$$

$$\text{chicken} - \text{crown} = \square$$








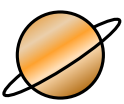

$$\text{bee} - \text{bull} = \square$$

$$\text{chicken} - \text{castle} = \square$$

$$\text{bull} + \text{saw} = \square$$

$$\text{castle} + \text{bull} = \square$$

Bryd billedkoden og løs regnestykkerne.

								
9	4	1	8	3	5	6	2	7

$$\text{crown} + \text{planet} = \boxed{7}$$

$$\text{cat} - \text{crown} = \boxed{4}$$

$$\text{cat} - \text{chicken} = \boxed{2}$$

$$\text{bee} - \text{bull} = \boxed{3}$$

$$\text{bull} + \text{bee} = \boxed{9}$$

$$\text{castle} + \text{bee} = \boxed{7}$$

$$\text{chicken} + \text{planet} = \boxed{9}$$

$$\text{chicken} - \text{crown} = \boxed{2}$$

$$\text{bee} - \text{bull} = \boxed{3}$$

$$\text{chicken} - \text{castle} = \boxed{6}$$

$$\text{bull} + \text{saw} = \boxed{7}$$

$$\text{castle} + \text{bull} = \boxed{4}$$