










Bryd billedkoden og løs regnestykkerne.

								
4	5	3	2	1	9	8	7	6

$$\text{Eagle} + \text{House} = \square$$

$$\text{Eagle} + \text{Fairy} = \square$$

$$\text{Tree} + \text{Fairy} = \square$$

$$\text{Whale} - \text{Snail} = \square$$

$$\text{Eagle} - \text{Snail} = \square$$

$$\text{Goat} - \text{Whale} = \square$$

$$\text{Whale} + \text{Snail} = \square$$

$$\text{House} - \text{Eagle} = \square$$










$$\text{House} - \text{Eagle} = \square$$

$$\text{Whale} - \text{Eagle} = \square$$

$$\text{Tree} + \text{Scissors} = \square$$

$$\text{House} + \text{Tree} = \square$$

Bryd billedkoden og løs regnestykkerne.

								
4	5	3	2	1	9	8	7	6



+



=

8



+



=

7




+



=

5



-



=

5




-




=

1




-



=

2



+



=

9



-



=

2




-



=

2



-



=

4



+



=

7



+



=

6