










Bryd billedkoden og løs regnestykkerne.

								
6	2	8	9	5	3	1	7	4

$$\text{Whale} - \text{Basketball} = \square$$

$$\text{Snail} + \text{Snail} = \square$$

$$\text{Octopus} + \text{Whale} = \square$$

$$\text{Cheese} - \text{Castle} = \square$$

$$\text{Whale} + \text{Jester} = \square$$

$$\text{Snail} - \text{Octopus} = \square$$

$$\text{Cheese} - \text{Whale} = \square$$

$$\text{Snail} + \text{Basketball} = \square$$










$$\text{Castle} - \text{Snail} = \square$$

$$\text{Basketball} - \text{Snail} = \square$$

$$\text{Basketball} + \text{Jester} = \square$$

$$\text{Octopus} + \text{Octopus} = \square$$

Bryd billedkoden og løs regnestykkerne.

								
6	2	8	9	5	3	1	7	4

$$\text{Whale} - \text{Basketball} = \boxed{2}$$

$$\text{Snail} + \text{Snail} = \boxed{6}$$

$$\text{Octopus} + \text{Whale} = \boxed{8}$$

$$\text{Cheese} - \text{Castle} = \boxed{3}$$

$$\text{Whale} + \text{Jester} = \boxed{9}$$

$$\text{Snail} - \text{Octopus} = \boxed{2}$$

$$\text{Cheese} - \text{Whale} = \boxed{2}$$

$$\text{Snail} + \text{Basketball} = \boxed{8}$$

$$\text{Castle} - \text{Snail} = \boxed{3}$$

$$\text{Basketball} - \text{Snail} = \boxed{2}$$

$$\text{Basketball} + \text{Jester} = \boxed{7}$$

$$\text{Octopus} + \text{Octopus} = \boxed{2}$$