










Bryd billedkoden og løs regnestykkerne.

								
4	1	2	9	5	8	7	3	6

$$\text{Envelope} - \text{Pig} = \square$$

$$\text{Toothbrush} - \text{Puppy} = \square$$

$$\text{Puppy} + \text{Banana} = \square$$

$$\text{Firecracker} + \text{Pig} = \square$$

$$\text{Toothbrush} - \text{Banana} = \square$$

$$\text{Banana} + \text{Puppy} = \square$$

$$\text{Pig} + \text{Puppy} = \square$$

$$\text{Firecracker} - \text{Puppy} = \square$$










$$\text{Firecracker} + \text{Elephant} = \square$$

$$\text{Puppy} + \text{Bull's head} = \square$$

$$\text{Toothbrush} - \text{Firecracker} = \square$$

$$\text{Toothbrush} - \text{Pig} = \square$$

Bryd billedkoden og løs regnestykkerne.

								
4	1	2	9	5	8	7	3	6

$$\text{Envelope} - \text{Pig} = \boxed{3}$$

$$\text{Toothbrush} - \text{Puppy} = \boxed{8}$$

$$\text{Puppy} + \text{Banana} = \boxed{8}$$

$$\text{Firecracker} + \text{Pig} = \boxed{8}$$

$$\text{Toothbrush} - \text{Banana} = \boxed{2}$$

$$\text{Banana} + \text{Puppy} = \boxed{8}$$

$$\text{Pig} + \text{Puppy} = \boxed{6}$$

$$\text{Firecracker} - \text{Puppy} = \boxed{2}$$

$$\text{Firecracker} + \text{Elephant} = \boxed{5}$$

$$\text{Puppy} + \text{Bull's head} = \boxed{5}$$

$$\text{Toothbrush} - \text{Firecracker} = \boxed{6}$$

$$\text{Toothbrush} - \text{Pig} = \boxed{4}$$