











































Bryd billedkoden og løs regnestykkerne.

								
2	5	9	4	7	3	6	1	8

	-		=	<input type="text"/>		-		=	<input type="text"/>
	-		=	<input type="text"/>		-		=	<input type="text"/>
	-		=	<input type="text"/>		-		=	<input type="text"/>
	-		=	<input type="text"/>		-		=	<input type="text"/>
	-		=	<input type="text"/>		-		=	<input type="text"/>
	-		=	<input type="text"/>		-		=	<input type="text"/>

Bryd billedkoden og løs regnestykkerne.

								
2	5	9	4	7	3	6	1	8

$$\text{Turtle} - \text{Duck} = \boxed{5}$$

$$\text{Castle} - \text{Duck} = \boxed{4}$$

$$\text{Castle} - \text{Snake} = \boxed{2}$$

$$\text{Turtle} - \text{Duck} = \boxed{5}$$

$$\text{Watermelon} - \text{Duck} = \boxed{3}$$

$$\text{Turtle} - \text{Crescent moon} = \boxed{4}$$

$$\text{Watermelon} - \text{Snake} = \boxed{1}$$

$$\text{Castle} - \text{Frog} = \boxed{5}$$

$$\text{Turtle} - \text{Frog} = \boxed{6}$$

$$\text{Bull} - \text{Duck} = \boxed{6}$$

$$\text{Crescent moon} - \text{Frog} = \boxed{2}$$

$$\text{Watermelon} - \text{Crescent moon} = \boxed{2}$$