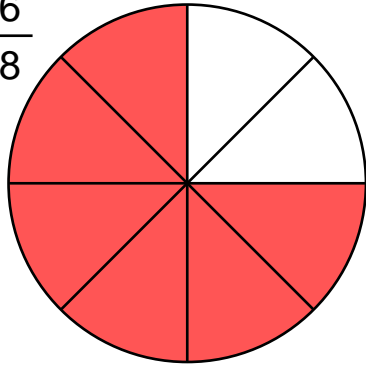
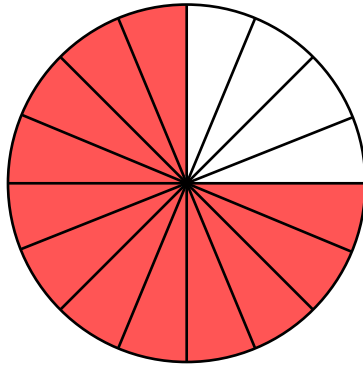


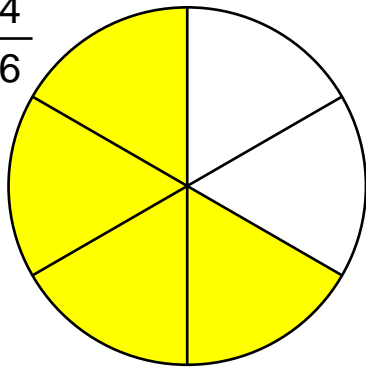
Skriv de manglende tal i brøkerne yderst til højre. Brøkernes værdi ændres ikke.

 $\frac{6}{8}$


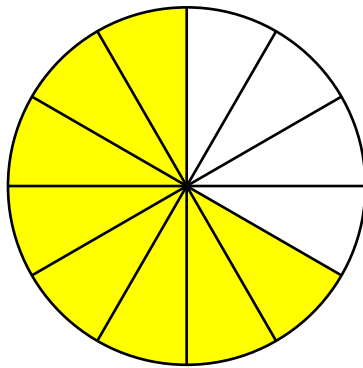
=



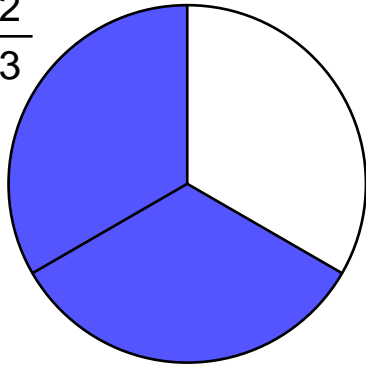
$$\frac{6}{8} = \frac{\quad}{\quad}$$

 $\frac{4}{6}$


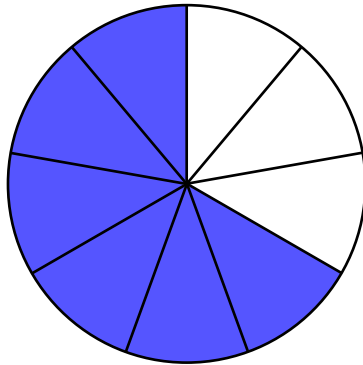
=



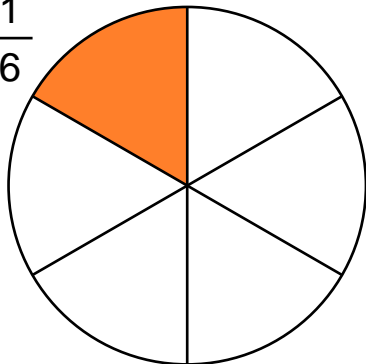
$$\frac{4}{6} = \frac{\quad}{\quad}$$

 $\frac{2}{3}$


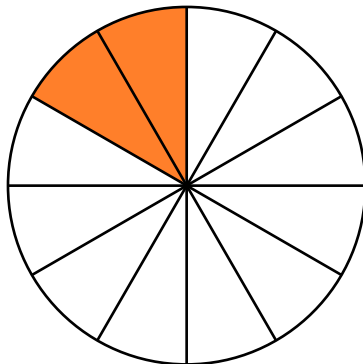
=



$$\frac{2}{3} = \frac{\quad}{\quad}$$

 $\frac{1}{6}$


=



$$\frac{1}{6} = \frac{\quad}{\quad}$$

Skriv de manglende tal i brøkerne yderst til højre. Brøkernes værdi ændres ikke.

