

Bryd billedkoden og løs regnestykkerne.

								
7	1	3	6	4	8	2	9	5

$$\text{Santa Claus} - \text{Snowflake} = \square$$

$$\text{Christmas tree} + \text{Yellow star} = \square$$

$$\text{Snowflake} + \text{Heart} = \square$$

$$\text{Christmas tree} - \text{Snowflake} = \square$$

$$\text{Yellow bell} - \text{Heart} = \square$$

$$\text{Santa Claus} + \text{Snowflake} = \square$$

$$\text{Snowflake} + \text{Yellow star} = \square$$

$$\text{Heart} + \text{Snowflake} = \square$$










$$\text{Santa Claus} - \text{Snowflake} = \square$$

$$\text{Angel} - \text{Snowflake} = \square$$

$$\text{Angel} - \text{Christmas tree} = \square$$

$$\text{Santa Claus} + \text{Gift box} = \square$$

Bryd billedkoden og løs regnestykkerne.

								
7	1	3	6	4	8	2	9	5

$$\text{Santa Claus} - \text{Snowflake} = \boxed{2}$$

$$\text{Christmas Tree} + \text{Star} = \boxed{9}$$

$$\text{Snowflake} + \text{Heart} = \boxed{8}$$

$$\text{Christmas Tree} - \text{Snowflake} = \boxed{4}$$

$$\text{Bells} - \text{Heart} = \boxed{1}$$

$$\text{Santa Claus} + \text{Snowflake} = \boxed{5}$$

$$\text{Snowflake} + \text{Star} = \boxed{5}$$

$$\text{Heart} + \text{Snowflake} = \boxed{9}$$

$$\text{Santa Claus} - \text{Snowflake} = \boxed{1}$$

$$\text{Angel} - \text{Snowflake} = \boxed{8}$$

$$\text{Angel} - \text{Christmas Tree} = \boxed{4}$$

$$\text{Santa Claus} + \text{Gift Box} = \boxed{9}$$