










Bryd billedkoden og løs regnestykkerne.

								
4	9	8	5	2	3	1	7	6

$$\text{Bells} - \text{Mary and baby} = \square$$

$$\text{Angel} + \text{Mary and baby} = \square$$

$$\text{Snowflake} - \text{Santa Claus} = \square$$

$$\text{Santa Claus} - \text{Christmas tree} = \square$$

$$\text{Santa Claus} + \text{Santa Claus} = \square$$

$$\text{Santa Claus} + \text{Snowflake} = \square$$

$$\text{Danish heart} + \text{Christmas tree} = \square$$

$$\text{Snowflake} + \text{Christmas tree} = \square$$










$$\text{Snowflake} - \text{Christmas tree} = \square$$

$$\text{Santa Claus} - \text{Christmas tree} = \square$$

$$\text{Angel} + \text{Angel} = \square$$

$$\text{Danish heart} - \text{Gift box} = \square$$

Bryd billedkoden og løs regnestykkerne.

								
4	9	8	5	2	3	1	7	6

$$\text{Bells} - \text{Mary and baby} = 5$$

$$\text{Angel} + \text{Mary and baby} = 5$$

$$\text{Snowflake} - \text{Santa Claus} = 2$$

$$\text{Santa Claus} - \text{Christmas tree} = 1$$

$$\text{Santa Claus} + \text{Santa Claus} = 6$$

$$\text{Santa Claus} + \text{Snowflake} = 8$$

$$\text{Danish heart} + \text{Christmas tree} = 9$$

$$\text{Snowflake} + \text{Christmas tree} = 7$$

$$\text{Snowflake} - \text{Christmas tree} = 3$$

$$\text{Santa Claus} - \text{Christmas tree} = 1$$

$$\text{Angel} + \text{Angel} = 2$$

$$\text{Danish heart} - \text{Gift box} = 1$$