










Bryd billedkoden og løs regnestykkerne.

								
9	8	2	1	6	4	7	5	3

$$\text{Large snowflake} - \text{Green Christmas tree} = \square$$

$$\text{Mary and baby} - \text{Blue gift box} = \square$$

$$\text{Small snowflake} + \text{Mary and baby} = \square$$

$$\text{Small snowflake} + \text{Green Christmas tree} = \square$$

$$\text{Mary and baby} - \text{Blue gift box} = \square$$

$$\text{Red and white heart} + \text{Blue gift box} = \square$$

$$\text{Green Christmas tree} + \text{Blue gift box} = \square$$

$$\text{Green Christmas tree} - \text{Small snowflake} = \square$$







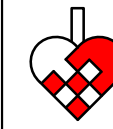


$$\text{Green Christmas tree} - \text{Angel} = \square$$

$$\text{Mary and baby} + \text{Angel} = \square$$

$$\text{Red and white heart} - \text{Green Christmas tree} = \square$$

$$\text{Mary and baby} + \text{Small snowflake} = \square$$

Bryd billedkoden og løs regnestykkerne.

								
9	8	2	1	6	4	7	5	3

$$\text{Large snowflake} - \text{Christmas tree} = 4$$

$$\text{Mary and child} - \text{Blue gift box} = 1$$

$$\text{Small snowflake} + \text{Mary and child} = 4$$

$$\text{Small snowflake} + \text{Christmas tree} = 6$$

$$\text{Mary and child} - \text{Blue gift box} = 1$$

$$\text{Red and white heart} + \text{Blue gift box} = 9$$

$$\text{Christmas tree} + \text{Blue gift box} = 7$$

$$\text{Christmas tree} - \text{Small snowflake} = 4$$

$$\text{Christmas tree} - \text{Angel} = 1$$

$$\text{Mary and child} + \text{Angel} = 7$$

$$\text{Red and white heart} - \text{Christmas tree} = 2$$

$$\text{Mary and child} + \text{Small snowflake} = 4$$