


Bryd billedkoden og løs regnestykkerne.

								
2	7	8	4	9	3	6	1	5

$$\text{Large snowflake} + \text{Yellow star} = \square$$

$$\text{Angel} + \text{Large snowflake} = \square$$

$$\text{Gift box} - \text{Christmas tree} = \square$$

$$\text{Yellow star} - \text{Yellow bells} = \square$$

$$\text{Large snowflake} + \text{Large snowflake} = \square$$

$$\text{Large snowflake} - \text{Yellow star} = \square$$

$$\text{Angel} - \text{Large snowflake} = \square$$

$$\text{Santa Claus} - \text{Large snowflake} = \square$$





$$\text{Large snowflake} + \text{Small snowflake} = \square$$

$$\text{Yellow star} + \text{Yellow star} = \square$$

$$\text{Yellow star} + \text{Christmas tree} = \square$$

$$\text{Gift box} - \text{Large snowflake} = \square$$

Bryd billedkoden og løs regnestykkerne.

								
2	7	8	4	9	3	6	1	5

$$\text{Snowflake} + \text{Yellow star} = \boxed{8}$$

$$\text{Angel} + \text{Snowflake} = \boxed{8}$$

$$\text{Gift box} - \text{Christmas tree} = \boxed{5}$$

$$\text{Yellow star} - \text{Yellow bells} = \boxed{1}$$

$$\text{Snowflake} + \text{Snowflake} = \boxed{2}$$

$$\text{Snowflake} - \text{Yellow star} = \boxed{2}$$

$$\text{Angel} - \text{Snowflake} = \boxed{6}$$

$$\text{Santa Claus} - \text{Snowflake} = \boxed{3}$$

$$\text{Snowflake} + \text{Snowflake} = \boxed{6}$$

$$\text{Yellow star} + \text{Yellow star} = \boxed{6}$$

$$\text{Yellow star} + \text{Christmas tree} = \boxed{7}$$

$$\text{Gift box} - \text{Snowflake} = \boxed{4}$$