






Bryd billedkoden og løs regnestykkerne.

								
7	8	9	3	1	5	2	6	4

$$\text{Gift box} - \text{Snowflake} = \square$$

$$\text{Christmas tree} - \text{Mary and baby} = \square$$

$$\text{Red and white heart} - \text{Snowflake} = \square$$

$$\text{Angel} + \text{Snowflake} = \square$$

$$\text{Santa Claus} + \text{Snowflake} = \square$$

$$\text{Christmas tree} + \text{Snowflake} = \square$$

$$\text{Red and white heart} + \text{Snowflake} = \square$$

$$\text{Christmas tree} - \text{Angel} = \square$$










$$\text{Angel} + \text{Angel} = \square$$

$$\text{Santa Claus} + \text{Angel} = \square$$

$$\text{Red and white heart} - \text{Santa Claus} = \square$$

$$\text{Red and white heart} - \text{Angel} = \square$$

Bryd billedkoden og løs regnestykkerne.

								
7	8	9	3	1	5	2	6	4



-



=

1



-



=

3



-



=

3



+



=

5



+



=

9



+



=

9



+



=

7



-



=

4



+



=

6



+



=

4



-



=

4



-



=

2