

Bryd billedkoden og løs regnestykkerne.

								
2	4	6	7	8	5	1	9	3

$$\text{Danish heart} + \text{Snowflake} = \square$$

$$\text{Snowflake} + \text{Snowflake} = \square$$

$$\text{Angel} + \text{Snowflake} = \square$$

$$\text{Yellow star} + \text{Yellow star} = \square$$

$$\text{Yellow star} - \text{Snowflake} = \square$$

$$\text{Yellow star} + \text{Santa Claus} = \square$$

$$\text{Snowflake} + \text{Yellow star} = \square$$

$$\text{Angel} - \text{Yellow star} = \square$$










$$\text{Mary and Jesus} - \text{Snowflake} = \square$$

$$\text{Snowflake} - \text{Danish heart} = \square$$

$$\text{Danish heart} - \text{Santa Claus} = \square$$

$$\text{Danish heart} - \text{Yellow star} = \square$$

Bryd billedkoden og løs regnestykkerne.

								
2	4	6	7	8	5	1	9	3

$$\text{Danish heart} + \text{Large snowflake} = \boxed{6}$$

$$\text{Large snowflake} + \text{Small snowflake} = \boxed{7}$$

$$\text{Angel} + \text{Large snowflake} = \boxed{8}$$

$$\text{Yellow star} + \text{Yellow star} = \boxed{6}$$

$$\text{Yellow star} - \text{Large snowflake} = \boxed{2}$$

$$\text{Yellow star} + \text{Santa Claus} = \boxed{7}$$

$$\text{Large snowflake} + \text{Yellow star} = \boxed{4}$$

$$\text{Angel} - \text{Yellow star} = \boxed{4}$$

$$\text{Mary and baby} - \text{Large snowflake} = \boxed{3}$$

$$\text{Small snowflake} - \text{Danish heart} = \boxed{1}$$

$$\text{Danish heart} - \text{Santa Claus} = \boxed{1}$$

$$\text{Danish heart} - \text{Yellow star} = \boxed{2}$$