

Bryd billedkoden og løs regnestykkerne.

								
9	2	1	5	7	6	4	3	8

$$\text{Mary and baby} + \text{Yellow bells} = \square$$

$$\text{Mary and baby} - \text{Yellow star} = \square$$

$$\text{Large snowflake} - \text{Small snowflake} = \square$$

$$\text{Large snowflake} - \text{Mary and baby} = \square$$

$$\text{Christmas tree} - \text{Red and white heart} = \square$$

$$\text{Small snowflake} + \text{Red and white heart} = \square$$

$$\text{Small snowflake} - \text{Yellow star} = \square$$

$$\text{Yellow bells} + \text{Small snowflake} = \square$$








$$\text{Small snowflake} + \text{Mary and baby} = \square$$

$$\text{Yellow bells} + \text{Red and white heart} = \square$$

$$\text{Blue gift box} - \text{Small snowflake} = \square$$

$$\text{Blue gift box} + \text{Yellow star} = \square$$

Bryd billedkoden og løs regnestykkerne.

								
9	2	1	5	7	6	4	3	8

$$\text{Mary and baby} + \text{Yellow bells} = \boxed{6}$$

$$\text{Mary and baby} - \text{Yellow star} = \boxed{3}$$

$$\text{Large snowflake} - \text{Small snowflake} = \boxed{5}$$

$$\text{Large snowflake} - \text{Mary and baby} = \boxed{3}$$

$$\text{Christmas tree} - \text{Red and white heart} = \boxed{3}$$

$$\text{Small snowflake} + \text{Red and white heart} = \boxed{9}$$

$$\text{Small snowflake} - \text{Yellow star} = \boxed{1}$$

$$\text{Yellow bells} + \text{Small snowflake} = \boxed{9}$$

$$\text{Small snowflake} + \text{Mary and baby} = \boxed{8}$$

$$\text{Yellow bells} + \text{Red and white heart} = \boxed{7}$$

$$\text{Blue gift box} - \text{Small snowflake} = \boxed{4}$$

$$\text{Blue gift box} + \text{Yellow star} = \boxed{9}$$