


Bryd billedkoden og løs regnestykkerne.

								
2	7	8	4	9	3	6	1	5



-



=



-



=



-



=



-



=



-



=



-



=



-



=



-



=



-



=



-



=



-



=













-




=

Bryd billedkoden og løs regnestykkerne.

								
2	7	8	4	9	3	6	1	5



$$= \boxed{1}$$



$$= \boxed{3}$$



$$= \boxed{5}$$




$$= \boxed{1}$$



$$= \boxed{1}$$



$$= \boxed{2}$$



$$= \boxed{6}$$



$$= \boxed{3}$$



$$= \boxed{4}$$



$$= \boxed{1}$$



$$= \boxed{1}$$



$$= \boxed{4}$$