










Bryd billedkoden og løs regnestykkerne.

								
7	3	5	2	6	1	8	4	9

$$\text{Gift} - \text{Bells} = \square$$

$$\text{Snowflake} - \text{Danish Heart} = \square$$

$$\text{Snowflake} - \text{Gift} = \square$$

$$\text{Santa Claus} - \text{Bells} = \square$$

$$\text{Gift} - \text{Santa Claus} = \square$$

$$\text{Gift} - \text{Star} = \square$$

$$\text{Snowflake} - \text{Christmas Tree} = \square$$

$$\text{Christmas Tree} - \text{Bells} = \square$$










$$\text{Snowflake} - \text{Star} = \square$$

$$\text{Snowflake} - \text{Bells} = \square$$

$$\text{Snowflake} - \text{Santa Claus} = \square$$

$$\text{Snowflake} - \text{Mary and baby Jesus} = \square$$

Bryd billedkoden og løs regnestykkerne.

								
7	3	5	2	6	1	8	4	9

$$\text{Gift box} - \text{Yellow bells} = \boxed{6}$$

$$\text{Snowflake} - \text{Danish heart symbol} = \boxed{2}$$

$$\text{Snowflake} - \text{Gift box} = \boxed{1}$$

$$\text{Santa Claus} - \text{Yellow bells} = \boxed{2}$$

$$\text{Gift box} - \text{Santa Claus} = \boxed{4}$$

$$\text{Gift box} - \text{Yellow star} = \boxed{3}$$

$$\text{Snowflake} - \text{Christmas tree} = \boxed{6}$$

$$\text{Christmas tree} - \text{Yellow bells} = \boxed{1}$$

$$\text{Snowflake} - \text{Yellow star} = \boxed{4}$$

$$\text{Snowflake} - \text{Yellow bells} = \boxed{7}$$

$$\text{Snowflake} - \text{Santa Claus} = \boxed{2}$$

$$\text{Snowflake} - \text{Mary and Jesus} = \boxed{5}$$