










Bryd billedkoden og løs regnestykkerne.

								
7	5	8	1	3	2	4	9	6

$$\text{Heart} - \text{Gift} = \square$$

$$\text{Tree} - \text{Star} = \square$$

$$\text{Mary} - \text{Angel} = \square$$

$$\text{Tree} - \text{Snowflake} = \square$$

$$\text{Snowflake} - \text{Snowflake} = \square$$

$$\text{Mary} - \text{Gift} = \square$$

$$\text{Tree} - \text{Snowflake} = \square$$

$$\text{Gift} - \text{Snowflake} = \square$$










$$\text{Snowflake} - \text{Santa} = \square$$

$$\text{Star} - \text{Santa} = \square$$

$$\text{Tree} - \text{Star} = \square$$

$$\text{Heart} - \text{Tree} = \square$$

Bryd billedkoden og løs regnestykkerne.

								
7	5	8	1	3	2	4	9	6

$$\text{Heart} - \text{Gift} = \boxed{1}$$

$$\text{Tree} - \text{Star} = \boxed{2}$$

$$\text{Mary} - \text{Angel} = \boxed{1}$$

$$\text{Tree} - \text{Snowflake} = \boxed{1}$$

$$\text{Snowflake} - \text{Snowflake} = \boxed{2}$$

$$\text{Mary} - \text{Gift} = \boxed{3}$$

$$\text{Tree} - \text{Snowflake} = \boxed{1}$$

$$\text{Gift} - \text{Snowflake} = \boxed{3}$$

$$\text{Snowflake} - \text{Santa} = \boxed{4}$$

$$\text{Star} - \text{Santa} = \boxed{1}$$

$$\text{Tree} - \text{Star} = \boxed{2}$$

$$\text{Heart} - \text{Tree} = \boxed{3}$$