










Bryd billedkoden og løs regnestykkerne.

								
5	2	9	6	1	7	8	4	3

$$\text{Santa Claus} - \text{Gift box} = \square$$

$$\text{Angel} - \text{Danish heart} = \square$$

$$\text{Danish heart} - \text{Yellow bells} = \square$$

$$\text{Angel} - \text{Yellow bells} = \square$$

$$\text{Gift box} - \text{Danish heart} = \square$$

$$\text{Santa Claus} - \text{Gift box} = \square$$

$$\text{Christmas tree} - \text{Angel} = \square$$

$$\text{Angel} - \text{Yellow bells} = \square$$










$$\text{Santa Claus} - \text{Gift box} = \square$$

$$\text{Snowflake} - \text{Gift box} = \square$$

$$\text{Snowflake} - \text{Santa Claus} = \square$$

$$\text{Santa Claus} - \text{Snowflake} = \square$$

Bryd billedkoden og løs regnestykkerne.

								
5	2	9	6	1	7	8	4	3

$$\text{Santa Claus} - \text{Gift box} = 2$$

$$\text{Angel} - \text{Danish heart} = 4$$

$$\text{Danish heart} - \text{Yellow bells} = 1$$

$$\text{Angel} - \text{Yellow bells} = 5$$

$$\text{Gift box} - \text{Danish heart} = 1$$

$$\text{Santa Claus} - \text{Gift box} = 2$$

$$\text{Christmas tree} - \text{Angel} = 1$$

$$\text{Angel} - \text{Yellow bells} = 5$$

$$\text{Santa Claus} - \text{Gift box} = 2$$

$$\text{Snowflake} - \text{Gift box} = 1$$

$$\text{Snowflake} - \text{Santa Claus} = 3$$

$$\text{Santa Claus} - \text{Snowflake} = 1$$