










Bryd billedkoden og løs regnestykkerne.

								
1	9	3	6	4	5	7	8	2

$$\text{Yellow bells} - \text{Blue gift box} = \square$$

$$\text{Snowflake} - \text{Red and white heart} = \square$$

$$\text{Snowflake} - \text{Yellow bells} = \square$$

$$\text{Red and white heart} - \text{Blue gift box} = \square$$

$$\text{Christmas tree} - \text{Yellow bells} = \square$$

$$\text{Snowflake} - \text{Yellow bells} = \square$$

$$\text{Red and white heart} - \text{Angel} = \square$$

$$\text{Yellow bells} - \text{Blue gift box} = \square$$










$$\text{Yellow bells} - \text{Red and white heart} = \square$$

$$\text{Christmas tree} - \text{Angel} = \square$$

$$\text{Christmas tree} - \text{Angel} = \square$$

$$\text{Snowflake} - \text{Yellow star} = \square$$

Bryd billedkoden og løs regnestykkerne.

								
1	9	3	6	4	5	7	8	2

$$\text{Yellow bells} - \text{Blue gift box} = \boxed{3}$$

$$\text{Snowflake} - \text{Red and white heart} = \boxed{5}$$

$$\text{Snowflake} - \text{Yellow bells} = \boxed{3}$$

$$\text{Red and white heart} - \text{Blue gift box} = \boxed{2}$$

$$\text{Christmas tree} - \text{Yellow bells} = \boxed{2}$$

$$\text{Snowflake} - \text{Yellow bells} = \boxed{4}$$

$$\text{Red and white heart} - \text{Angel} = \boxed{1}$$

$$\text{Yellow bells} - \text{Blue gift box} = \boxed{3}$$

$$\text{Yellow bells} - \text{Red and white heart} = \boxed{1}$$

$$\text{Christmas tree} - \text{Angel} = \boxed{4}$$

$$\text{Christmas tree} - \text{Angel} = \boxed{4}$$

$$\text{Snowflake} - \text{Yellow star} = \boxed{2}$$