










Bryd billedkoden og løs regnestykkerne.

								
4	7	3	9	1	8	6	5	2

$$\text{Snowflake} - \text{Danish heart} = \square$$

$$\text{Christmas tree} - \text{Danish heart} = \square$$

$$\text{Danish heart} - \text{Snowflake} = \square$$

$$\text{Gift box} - \text{Snowflake} = \square$$

$$\text{Snowflake} - \text{Danish heart} = \square$$

$$\text{Yellow star} - \text{Danish heart} = \square$$

$$\text{Mary and baby} - \text{Snowflake} = \square$$

$$\text{Santa Claus} - \text{Yellow star} = \square$$










$$\text{Snowflake} - \text{Danish heart} = \square$$

$$\text{Santa Claus} - \text{Gift box} = \square$$

$$\text{Yellow star} - \text{Yellow bells} = \square$$

$$\text{Snowflake} - \text{Snowflake} = \square$$

Bryd billedkoden og løs regnestykkerne.

								
4	7	3	9	1	8	6	5	2

$$\text{Snowflake} - \text{Danish heart} = \boxed{1}$$

$$\text{Christmas tree} - \text{Danish heart} = \boxed{6}$$

$$\text{Danish heart} - \text{Snowflake} = \boxed{1}$$

$$\text{Gift box} - \text{Snowflake} = \boxed{2}$$

$$\text{Snowflake} - \text{Danish heart} = \boxed{1}$$

$$\text{Yellow star} - \text{Danish heart} = \boxed{2}$$

$$\text{Mary and baby} - \text{Snowflake} = \boxed{6}$$

$$\text{Santa Claus} - \text{Yellow star} = \boxed{2}$$

$$\text{Snowflake} - \text{Danish heart} = \boxed{1}$$

$$\text{Santa Claus} - \text{Gift box} = \boxed{1}$$

$$\text{Yellow star} - \text{Yellow bells} = \boxed{4}$$

$$\text{Snowflake} - \text{Snowflake} = \boxed{2}$$