










Bryd billedkoden og løs regnestykkerne.

								
4	2	9	5	7	1	8	6	3

$$\text{castle} + \text{lips} = \square$$

$$\text{eye} + \text{rocket} = \square$$

$$\text{eye} + \text{fire} = \square$$

$$\text{bull head} + \text{eye} = \square$$

$$\text{lips} + \text{eye} = \square$$

$$\text{lemons} + \text{castle} = \square$$

$$\text{lemons} + \text{castle} = \square$$

$$\text{chicken} + \text{bull head} = \square$$










$$\text{bull head} + \text{car} = \square$$

$$\text{car} + \text{eye} = \square$$

$$\text{lips} + \text{chicken} = \square$$

$$\text{fire} + \text{eye} = \square$$

Bryd billedkoden og løs regnestykkerne.

								
4	2	9	5	7	1	8	6	3

$$\text{Castle} + \text{Lips} = 9$$

$$\text{Eye} + \text{Rocket} = 12$$

$$\text{Eye} + \text{Campfire} = 11$$

$$\text{Bull's head} + \text{Eye} = 7$$

$$\text{Lips} + \text{Eye} = 5$$

$$\text{Lemons} + \text{Castle} = 8$$

$$\text{Lemons} + \text{Castle} = 8$$

$$\text{Chicken} + \text{Bull's head} = 9$$

$$\text{Bull's head} + \text{Car} = 10$$

$$\text{Car} + \text{Eye} = 9$$

$$\text{Lips} + \text{Chicken} = 7$$

$$\text{Campfire} + \text{Eye} = 11$$