


















Bryd billedkoden og løs regnestykkerne.



								
2	5	1	8	7	3	6	9	4

 +  =



 +  =



 +  =



 +  =



 +  =



 +  =



 +  =

 +  =










 +  =

 +  =

 +  =

 +  =

Bryd billedkoden og løs regnestykkerne.

								
2	5	1	8	7	3	6	9	4

$$\text{Cow} + \text{Mosquito} = \boxed{9}$$

$$\text{Dolphin} + \text{Cow} = \boxed{12}$$

$$\text{Banana} + \text{Cow} = \boxed{5}$$

$$\text{Baby} + \text{Cow} = \boxed{6}$$

$$\text{Mosquito} + \text{Crescent moon} = \boxed{8}$$

$$\text{Turtle} + \text{Turtle} = \boxed{14}$$

$$\text{Cow} + \text{Seahorse} = \boxed{10}$$

$$\text{Seahorse} + \text{Baby} = \boxed{8}$$

$$\text{Crescent moon} + \text{Crescent moon} = \boxed{6}$$

$$\text{Baby} + \text{Tractor} = \boxed{11}$$

$$\text{Crescent moon} + \text{Banana} = \boxed{4}$$

$$\text{Banana} + \text{Seahorse} = \boxed{7}$$