










Bryd billedkoden og løs regnestykkerne.

								
1	4	3	7	9	5	8	6	2

$$\text{Basketball} + \text{Alarm Clock} = \square$$

$$\text{Carrot} + \text{Lemons} = \square$$

$$\text{Basketball} + \text{Strawberry} = \square$$

$$\text{Cobra} + \text{Mouse} = \square$$

$$\text{Strawberry} + \text{Cat} = \square$$

$$\text{Lemons} + \text{Strawberry} = \square$$

$$\text{Cat} + \text{Fish} = \square$$

$$\text{Mouse} + \text{Cobra} = \square$$










$$\text{Cat} + \text{Fish} = \square$$

$$\text{Fish} + \text{Strawberry} = \square$$

$$\text{Carrot} + \text{Mouse} = \square$$

$$\text{Mouse} + \text{Fish} = \square$$

Bryd billedkoden og løs regnestykkerne.

								
1	4	3	7	9	5	8	6	2

$$\text{Basketball} + \text{Alarm clock} = 11$$

$$\text{Carrot} + \text{Lemons} = 11$$

$$\text{Basketball} + \text{Strawberry} = 8$$

$$\text{Cobra} + \text{Mouse} = 8$$

$$\text{Strawberry} + \text{Cat} = 7$$

$$\text{Lemons} + \text{Strawberry} = 13$$

$$\text{Cat} + \text{Fish} = 9$$

$$\text{Mouse} + \text{Cobra} = 8$$

$$\text{Cat} + \text{Fish} = 9$$

$$\text{Fish} + \text{Strawberry} = 14$$

$$\text{Carrot} + \text{Mouse} = 7$$

$$\text{Mouse} + \text{Fish} = 11$$