










Bryd billedkoden og løs regnestykkerne.

								
9	6	3	5	2	4	7	1	8

$$\text{cow} + \text{cow} = \square$$

$$\text{dolphin} + \text{cow} = \square$$

$$\text{rocket} + \text{mosquito} = \square$$

$$\text{shoe} + \text{goat} = \square$$

$$\text{duck} + \text{dolphin} = \square$$

$$\text{moon} + \text{cow} = \square$$

$$\text{car} + \text{shoe} = \square$$

$$\text{shoe} + \text{car} = \square$$










$$\text{cow} + \text{moon} = \square$$

$$\text{moon} + \text{dolphin} = \square$$

$$\text{car} + \text{moon} = \square$$

$$\text{goat} + \text{cow} = \square$$

Bryd billedkoden og løs regnestykkerne.

								
9	6	3	5	2	4	7	1	8

$$\text{cow} + \text{cow} = \boxed{4}$$

$$\text{dolphin} + \text{cow} = \boxed{10}$$

$$\text{rocket} + \text{mosquito} = \boxed{16}$$

$$\text{shoe} + \text{goat} = \boxed{8}$$

$$\text{duck} + \text{dolphin} = \boxed{14}$$

$$\text{moon} + \text{cow} = \boxed{6}$$

$$\text{car} + \text{shoe} = \boxed{4}$$

$$\text{shoe} + \text{car} = \boxed{4}$$

$$\text{cow} + \text{moon} = \boxed{6}$$

$$\text{moon} + \text{dolphin} = \boxed{12}$$

$$\text{car} + \text{moon} = \boxed{5}$$

$$\text{goat} + \text{cow} = \boxed{7}$$