
















Bryd billedkoden og løs regnestykkerne.



								
9	3	4	8	5	1	6	2	7



 +  =



 +  =



 +  =



 +  =



 +  =



 +  =



 +  =

 +  =










 +  =

 +  =

 +  =

 +  =

Bryd billedkoden og løs regnestykkerne.

								
9	3	4	8	5	1	6	2	7

$$\text{turtle} + \text{snail} = \boxed{9}$$

$$\text{crescent moon} + \text{crescent moon} = \boxed{8}$$

$$\text{duck} + \text{cobra} = \boxed{8}$$

$$\text{duck} + \text{cobra} = \boxed{8}$$

$$\text{snail} + \text{castle} = \boxed{8}$$

$$\text{watermelon slice} + \text{snail} = \boxed{7}$$

$$\text{snail} + \text{duck} = \boxed{4}$$

$$\text{cobra} + \text{frog} = \boxed{7}$$

$$\text{crescent moon} + \text{crescent moon} = \boxed{8}$$

$$\text{castle} + \text{frog} = \boxed{9}$$

$$\text{frog} + \text{frog} = \boxed{4}$$

$$\text{frog} + \text{castle} = \boxed{9}$$